


4 Time


A What's the time, please?

Time


1 * Nakresli hodinové ručičky.




1 It's quarter past eight.



2 It's half past two.




3 It's three o'clock.



4 It's quarter to seven.




5 It's ten to four.



6 It's twenty-five past three.

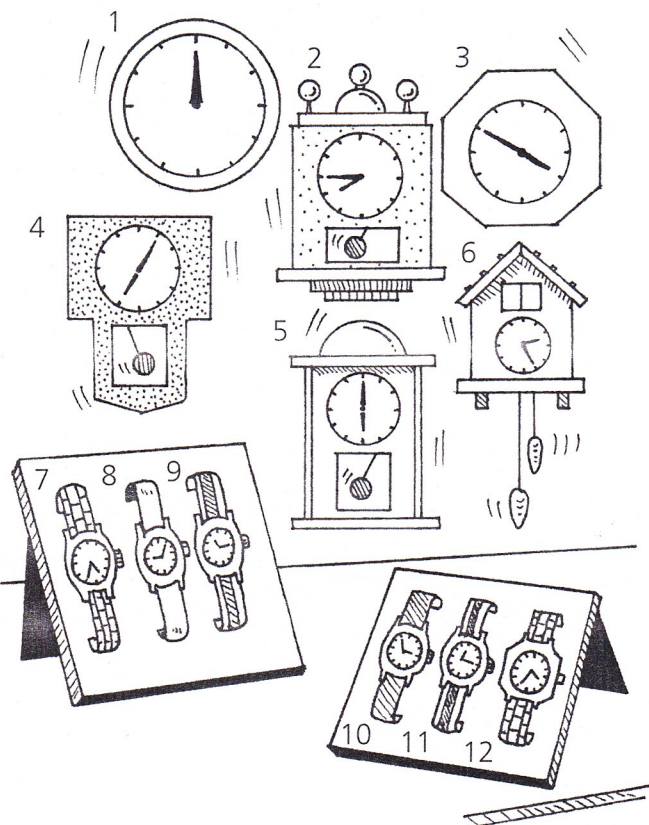


7 It's five to six.



8 It's ten past nine.

2 ** Napiš časy k jednotlivým hodinám a hodinkám.



- 1 *It's twelve o'clock.*
- 2 *It's quarter to eight.*
- 3 *It's ten to four.*
- 4 *It's five past seven.*
- 5 *It's six o'clock.*
- 6 *It's twenty-five past two.*
- 7 *It's twenty-five to five.*
- 8 *It's five past nine.*
- 9 *It's quarter past eleven.*
- 10 *It's five to three.*
- 11 *It's quarter past twelve.*
- 12 *It's twenty-five to four.*